

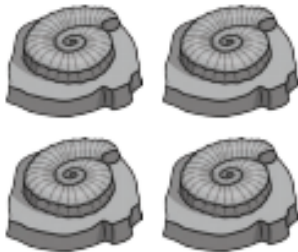
Can you solve the problems by using cross outs?



$$- \quad \mathbf{1} = \bigcirc$$




$$- \quad \mathbf{2} = \bigcirc$$




$$- \quad \mathbf{1} = \bigcirc$$



$$- \quad \mathbf{1} = \bigcirc$$



$$- \quad \mathbf{3} = \bigcirc$$



$$- \quad \mathbf{2} = \bigcirc$$