

Year 2 - Week 14 - Maths

Mental Maths

$3 \times 10 =$

$64 - 28 =$

$25 \div 5 =$

$24 + 59 =$

$19 + 71 =$

$51 - 38 =$

This week's learning is: **Addition and Subtraction**

This week we have put together some challenges to give you a chance to apply all the skills and efficient methods you have learnt throughout the course of year 2 😊

We have included an addition video and a subtraction one to help remind you of the methods we have learnt in class.

<https://youtu.be/0hzHe3QvYDM>

<https://youtu.be/YIUumJFP9Vc>

This week's key vocabulary:

addition	subtraction	greater than
less than	place value	tens
ones		

Year 2 Activities

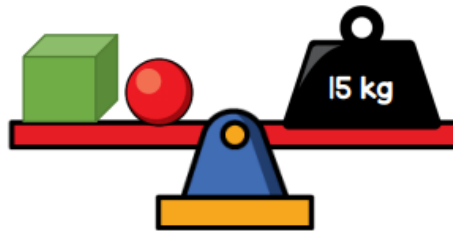
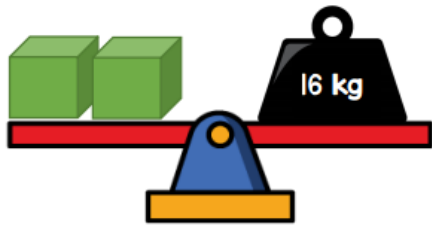
The cost of a pineapple is twice the cost of a melon.



£4 each

How much do the pineapple and the melon cost altogether?

Gina balances some scales.



What is the mass of the sphere?

Complete the number sentences:

$$60 + \square = 79$$

$$15 + 12 = 12 + \square$$

There are 50 children in a school.
15 of the children are girls.
How many more boys than girls
are in the school?

Sam has £50.

He buys this cap and jumper with
his money.



How much money does he have left?

Circle the number sentences that
are equal to 15.

$10 + 5$

$5 + 5 + 5$

$20 - 5$

$1 + 5$

Work out the value of each symbol.

$$\triangle + \triangle = 18$$

$$\triangle =$$

$$\triangle + \diamond = 30$$

$$\diamond =$$

$$\star - \diamond = 10$$

$$\star =$$

Here is how much it costs to go to the zoo.



Mr Jones and his 3 children go to the zoo.

How much does it cost them altogether?

What are the missing numbers?

$$64 = 10 + \square$$


$$39 = 100 - \square$$

Fill in the missing numbers.

$$10 \text{ less than } 46 \text{ is } \square$$

$$\square \text{ more than } 30 \text{ is } 35$$

Ahmed has these bread rolls to sell.



He sells 14 of the bread rolls.

How many does he have left?

Gemma has £20.

She buys 2 of these magazines.



How much money does Gemma have left?

Max has 4 number cards.




He uses them to make 2 calculations.

$$\square + \square = 70$$

$$\square - \square = 20$$

Can you work out where the numbers should go?

Rosie has 42 sweets in total.



How many sweets are in the bag? _____

Challenge: Noah's Ark



Noah saw 12 legs walk by into the ark.
How many creatures could he have seen?

How many different answers can you find?
Can you explain how you found out these answers?